

Student \_\_\_\_\_


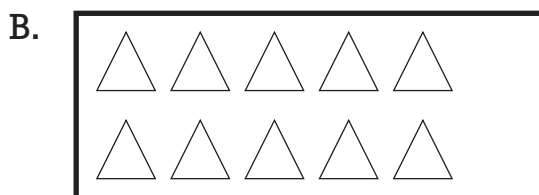
Date \_\_\_\_\_

Teacher \_\_\_\_\_

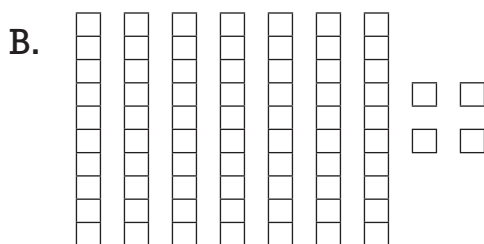
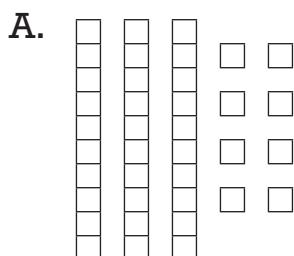
## E+MAT Grade 1

### Objective 1: Numbers, Operations and Quantitative Reasoning


1. Which picture shows a number less than 9?



2. Which number is greater?



3. Which set of objects is equal to 15?





4. Look at these pennies.



Circle the coin below that has the same value as these ten pennies.



5. Write a number sentence to match the picture.



$$\underline{\hspace{2cm}} + \underline{\hspace{2cm}} = \underline{\hspace{2cm}}$$

6. Write a number sentence to match the picture.



$$\underline{\hspace{2cm}} - \underline{\hspace{2cm}} = \underline{\hspace{2cm}}$$


7. How much is shaded?



\_\_\_\_\_ out of \_\_\_\_\_ parts

---

8. What fraction is shaded in the picture below?



- A. 1 out of 2 is shaded
- B. 2 out of 3 are shaded
- C. 3 out of 4 are shaded